







Complete the addition problems:

$\begin{array}{r} 7 \\ + 2 \\ \hline \end{array}$	$\begin{array}{r} 3 \\ + 9 \\ \hline \end{array}$	$\begin{array}{r} 5 \\ + 5 \\ \hline \end{array}$	$\begin{array}{r} 3 \\ + 7 \\ \hline \end{array}$
$\begin{array}{r} 8 \\ + 0 \\ \hline \end{array}$	$\begin{array}{r} 4 \\ + 7 \\ \hline \end{array}$	$\begin{array}{r} 9 \\ + 4 \\ \hline \end{array}$	$\begin{array}{r} 6 \\ + 2 \\ \hline \end{array}$
$\begin{array}{r} 9 \\ + 4 \\ \hline \end{array}$	$\begin{array}{r} 6 \\ + 4 \\ \hline \end{array}$	$\begin{array}{r} 7 \\ + 3 \\ \hline \end{array}$	$\begin{array}{r} 9 \\ + 2 \\ \hline \end{array}$

Write the time each clock says:

 _____	 _____
 _____	 _____
 _____	 _____

Complete the addition problems:

$6 + 7 = \underline{\quad\quad}$ $4 + 3 = \underline{\quad\quad}$ $7 + 9 = \underline{\quad\quad}$

$5 + 2 = \underline{\quad\quad}$ $6 + 8 = \underline{\quad\quad}$ $2 + 9 = \underline{\quad\quad}$

$3 + 6 = \underline{\quad\quad}$ $7 + 3 = \underline{\quad\quad}$ $9 + 6 = \underline{\quad\quad}$

Fill in each box with a greater than, less than, or equal to symbol:

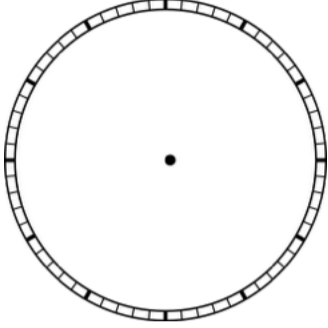
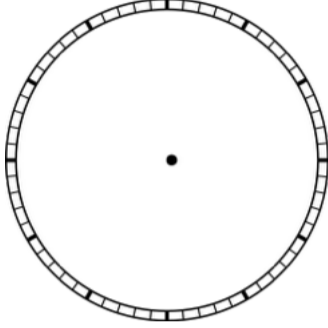
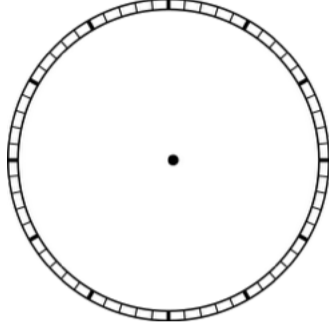
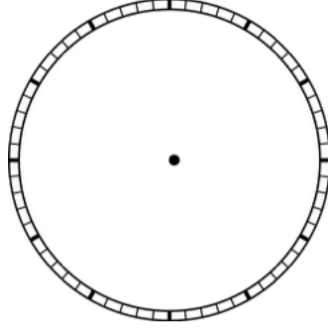
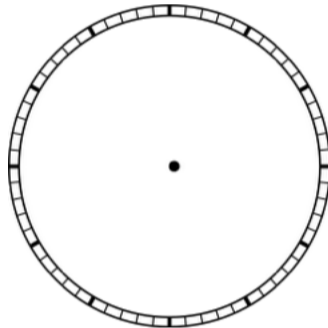
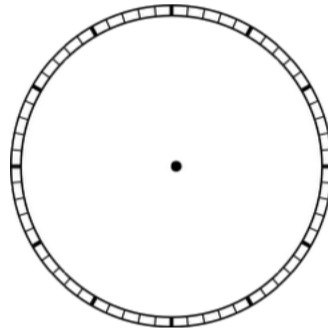
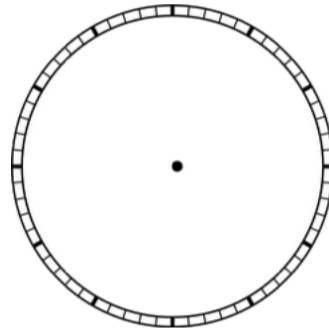
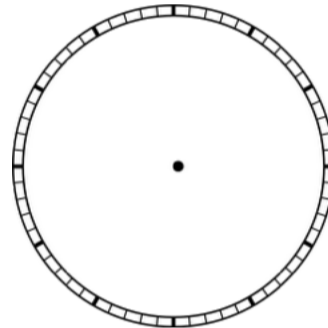
678**600****100****100****45****50****85****90****99****98****40****40**

Write the time each clock says:





Draw the hands on the clock to make the time:

			
4:30	9:15	12:15	7:45
			
8:15	9:00	12:30	9:15

Complete the addition problems:

$\begin{array}{r} 8 \\ + 6 \\ \hline \end{array}$	$\begin{array}{r} 4 \\ + 9 \\ \hline \end{array}$	$\begin{array}{r} 6 \\ + 1 \\ \hline \end{array}$	$\begin{array}{r} 8 \\ + 4 \\ \hline \end{array}$
$\begin{array}{r} 9 \\ + 3 \\ \hline \end{array}$	$\begin{array}{r} 7 \\ + 5 \\ \hline \end{array}$	$\begin{array}{r} 5 \\ + 0 \\ \hline \end{array}$	$\begin{array}{r} 2 \\ + 5 \\ \hline \end{array}$

Complete the addition problems:

$7 + 2 = \underline{\quad}$ $6 + 3 = \underline{\quad}$ $2 + 5 = \underline{\quad}$

$3 + 8 = \underline{\quad}$ $4 + 6 = \underline{\quad}$ $2 + 7 = \underline{\quad}$

$8 + 2 = \underline{\quad}$ $5 + 9 = \underline{\quad}$ $8 + 1 = \underline{\quad}$

Fill in numbers for the more than, less than, and equal to symbols:

$\underline{\quad} > \underline{\quad}$

$\underline{\quad} < \underline{\quad}$

$\underline{\quad} < \underline{\quad}$


$\underline{\quad} < \underline{\quad}$

$\underline{\quad} > \underline{\quad}$





$\underline{\quad} = \underline{\quad}$

Write the time each clock says:





Write the time each clock says:

 _____	 _____
 _____	 _____

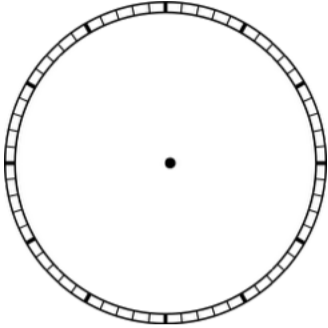
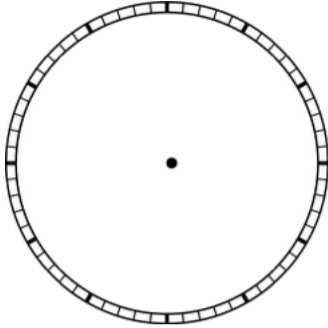
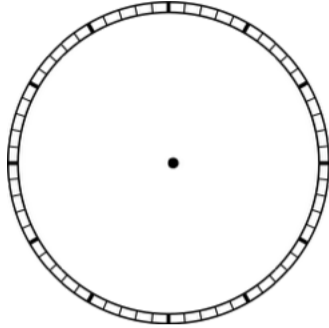
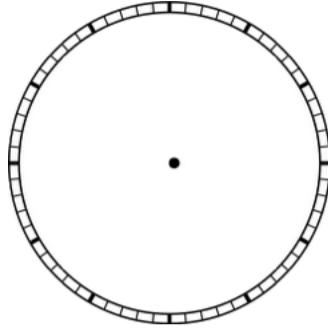
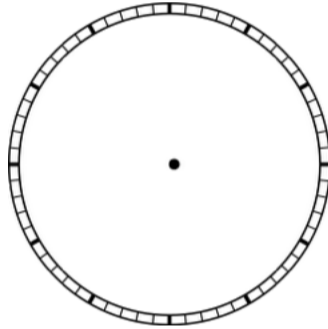
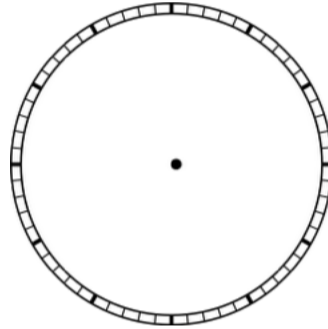
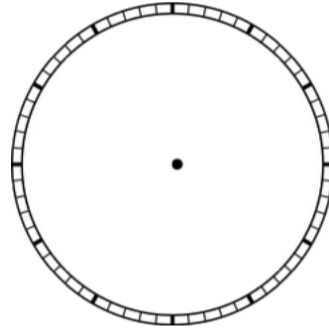
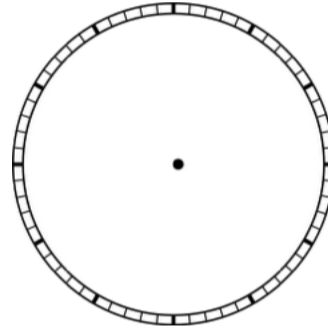
Fill in each box with a greater than, less than, or equal to symbol:

23	<input style="width: 40px; height: 40px;" type="text"/>	435	67	<input style="width: 40px; height: 40px;" type="text"/>	70
67	<input style="width: 40px; height: 40px;" type="text"/>	45	110	<input style="width: 40px; height: 40px;" type="text"/>	89



Complete the addition problems:

$\begin{array}{r} 4 \\ + 7 \\ \hline \end{array}$	$\begin{array}{r} 7 \\ + 8 \\ \hline \end{array}$	$\begin{array}{r} 4 \\ + 4 \\ \hline \end{array}$	$\begin{array}{r} 6 \\ + 2 \\ \hline \end{array}$
$\begin{array}{r} 5 \\ + 7 \\ \hline \end{array}$	$\begin{array}{r} 8 \\ + 5 \\ \hline \end{array}$	$\begin{array}{r} 0 \\ + 4 \\ \hline \end{array}$	$\begin{array}{r} 6 \\ + 3 \\ \hline \end{array}$

Draw the hands on the clock to make the time:

			
8:30	7:15	11:15	1:45
			
8:00	9:30	6:30	5:15

Write the time each clock says:

	_____		_____
---	-------	---	-------






Complete the addition problems:

$6 + 1 =$ _____	$0 + 9 =$ _____	$5 + 3 =$ _____
$4 + 6 =$ _____	$2 + 7 =$ _____	$3 + 5 =$ _____
$7 + 4 =$ _____	$2 + 6 =$ _____	$3 + 7 =$ _____

Complete the addition problems:

$\begin{array}{r} 8 \\ + 6 \\ \hline \end{array}$	$\begin{array}{r} 4 \\ + 9 \\ \hline \end{array}$	$\begin{array}{r} 6 \\ + 1 \\ \hline \end{array}$	$\begin{array}{r} 8 \\ + 4 \\ \hline \end{array}$
$\begin{array}{r} 9 \\ + 3 \\ \hline \end{array}$	$\begin{array}{r} 7 \\ + 5 \\ \hline \end{array}$	$\begin{array}{r} 5 \\ + 0 \\ \hline \end{array}$	$\begin{array}{r} 2 \\ + 5 \\ \hline \end{array}$

Match the clock to the time:

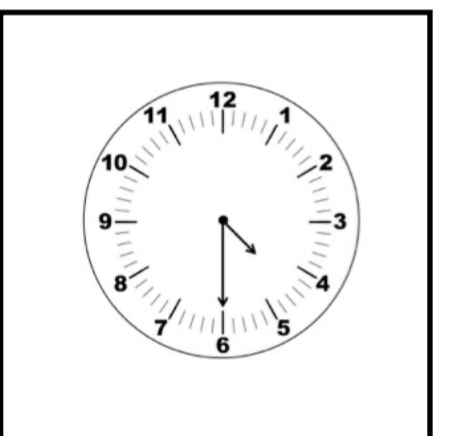




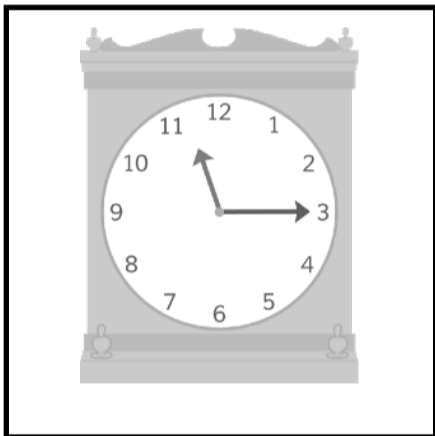
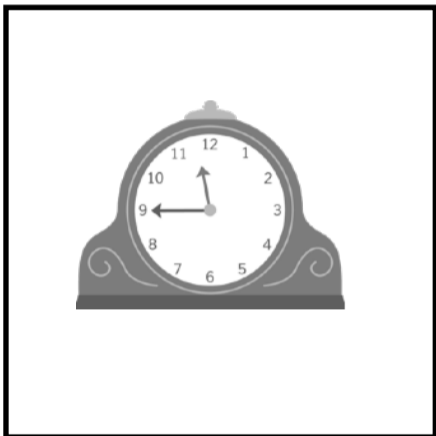

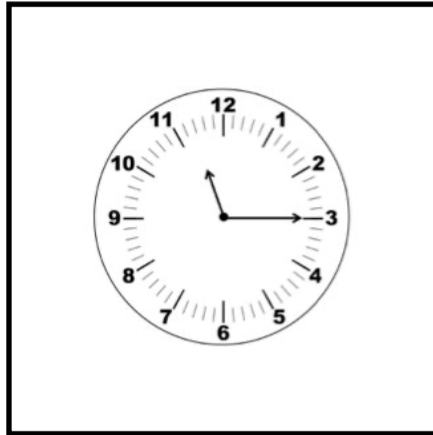

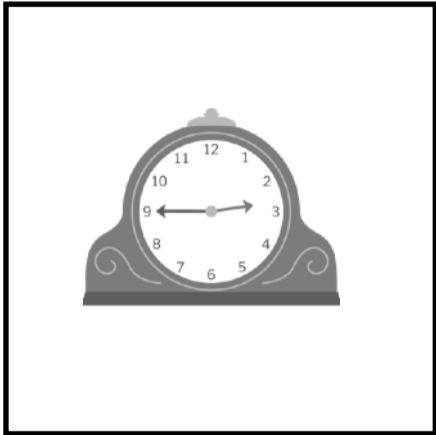
	4:15
	12:30
	6:00
	2:45
	1:30

Fill in the correct symbol >, <, or =:

17	<input type="text"/>	21
45	<input type="text"/>	30
3	<input type="text"/>	11
10	<input type="text"/>	10
32	<input type="text"/>	21
60	<input type="text"/>	13

Color the clocks that say **2:45** green.
Color the clocks that say **11:15** orange:

Color the clocks that say **4:30** purple.
Color the clocks that say **11:45** red:



Complete the addition problems:

$5 + 4 = \underline{\quad}$ $2 + 7 = \underline{\quad}$ $8 + 2 = \underline{\quad}$

$6 + 2 = \underline{\quad}$ $7 + 4 = \underline{\quad}$ $4 + 6 = \underline{\quad}$

$5 + 2 = \underline{\quad}$ $6 + 7 = \underline{\quad}$ $7 + 4 = \underline{\quad}$

Complete the addition problems:

$\begin{array}{r} 6 \\ + 4 \\ \hline \end{array}$	$\begin{array}{r} 9 \\ + 0 \\ \hline \end{array}$	$\begin{array}{r} 9 \\ + 3 \\ \hline \end{array}$	$\begin{array}{r} 2 \\ + 5 \\ \hline \end{array}$
$\begin{array}{r} 6 \\ + 3 \\ \hline \end{array}$	$\begin{array}{r} 4 \\ + 3 \\ \hline \end{array}$	$\begin{array}{r} 8 \\ + 9 \\ \hline \end{array}$	$\begin{array}{r} 4 \\ + 5 \\ \hline \end{array}$
$\begin{array}{r} 7 \\ + 8 \\ \hline \end{array}$	$\begin{array}{r} 2 \\ + 6 \\ \hline \end{array}$	$\begin{array}{r} 5 \\ + 1 \\ \hline \end{array}$	$\begin{array}{r} 8 \\ + 6 \\ \hline \end{array}$

Fill in numbers for the more than, less than, and equal to symbols:

_____ > _____	_____ < _____
_____ < _____	_____ > _____

Complete the addition problems:

$9 + 1 = \underline{\quad}$ $0 + 7 = \underline{\quad}$ $9 + 3 = \underline{\quad}$

$7 + 9 = \underline{\quad}$ $0 + 6 = \underline{\quad}$ $2 + 7 = \underline{\quad}$

$9 + 5 = \underline{\quad}$ $9 + 9 = \underline{\quad}$ $2 + 8 = \underline{\quad}$

Fill in each box with a greater than, less than, or equal to symbol:

45

67

99

100

300

213

809

909

Write the time each clock says:





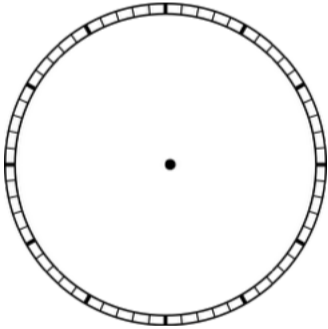
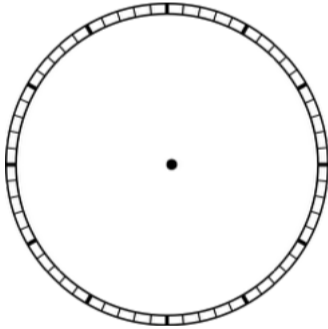
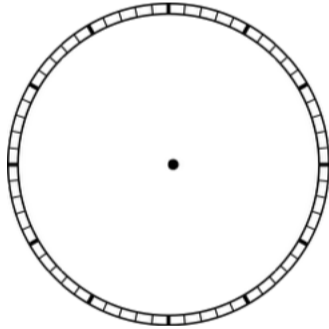
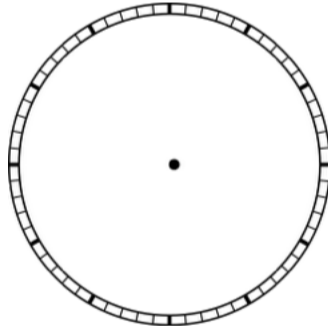
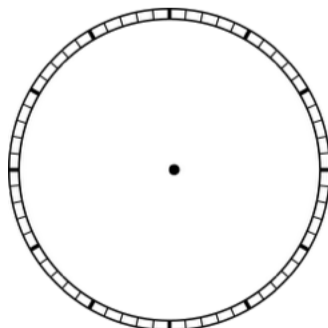
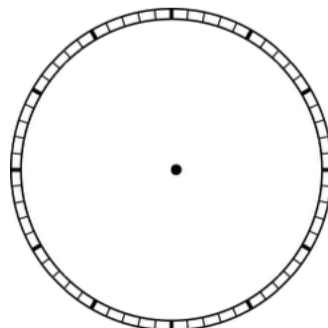
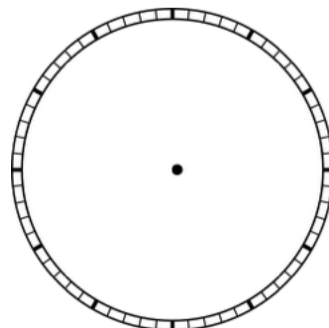
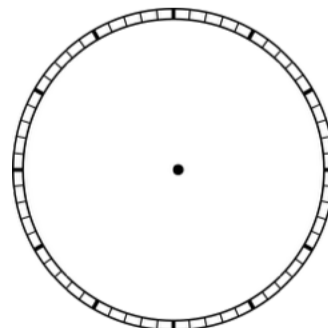






Complete the addition problems:

$\begin{array}{r} 8 \\ + 8 \\ \hline \end{array}$	$\begin{array}{r} 7 \\ + 3 \\ \hline \end{array}$	$\begin{array}{r} 0 \\ + 5 \\ \hline \end{array}$	$\begin{array}{r} 7 \\ + 2 \\ \hline \end{array}$
$\begin{array}{r} 3 \\ + 9 \\ \hline \end{array}$	$\begin{array}{r} 4 \\ + 1 \\ \hline \end{array}$	$\begin{array}{r} 4 \\ + 2 \\ \hline \end{array}$	$\begin{array}{r} 6 \\ + 7 \\ \hline \end{array}$

Draw the hands on the clock to make the time:

 11:15	 10:00	 9:15	 6:30
 8:45	 9:45	 7:45	 4:15

Write the time each clock says:

 _____	 _____
--	--

Fill in numbers for the more than, less than, and equal to symbols:

_____	>	_____	_____	<	_____
_____	<	_____	_____	<	_____
_____	>	_____	_____	=	_____

Complete the addition problems:

$2 + 5 = \underline{\quad}$	$8 + 4 = \underline{\quad}$	$2 + 4 = \underline{\quad}$
$6 + 4 = \underline{\quad}$	$2 + 7 = \underline{\quad}$	$3 + 5 = \underline{\quad}$
$2 + 5 = \underline{\quad}$	$6 + 2 = \underline{\quad}$	$7 + 8 = \underline{\quad}$

Complete the addition problems:

$\begin{array}{r} 9 \\ + 4 \\ \hline \end{array}$	$\begin{array}{r} 5 \\ + 7 \\ \hline \end{array}$	$\begin{array}{r} 6 \\ + 3 \\ \hline \end{array}$	$\begin{array}{r} 7 \\ + 4 \\ \hline \end{array}$
$\begin{array}{r} 3 \\ + 6 \\ \hline \end{array}$	$\begin{array}{r} 5 \\ + 4 \\ \hline \end{array}$	$\begin{array}{r} 8 \\ + 2 \\ \hline \end{array}$	$\begin{array}{r} 9 \\ + 4 \\ \hline \end{array}$
$\begin{array}{r} 6 \\ + 7 \\ \hline \end{array}$	$\begin{array}{r} 5 \\ + 1 \\ \hline \end{array}$	$\begin{array}{r} 7 \\ + 2 \\ \hline \end{array}$	$\begin{array}{r} 0 \\ + 6 \\ \hline \end{array}$

Fill in numbers for the more than, less than, and equal to symbols:

$\underline{\hspace{2cm}}$	\lt	$\underline{\hspace{2cm}}$	$\underline{\hspace{2cm}}$	$=$	$\underline{\hspace{2cm}}$
$\underline{\hspace{2cm}}$	\lt	$\underline{\hspace{2cm}}$	$\underline{\hspace{2cm}}$	\lt	$\underline{\hspace{2cm}}$
$\underline{\hspace{2cm}}$	$=$	$\underline{\hspace{2cm}}$	$\underline{\hspace{2cm}}$	\gt	$\underline{\hspace{2cm}}$

Complete the addition problems:






$9 + 3 = \underline{\quad}$ $5 + 6 = \underline{\quad}$ $2 + 5 = \underline{\quad}$

$6 + 2 = \underline{\quad}$ $5 + 7 = \underline{\quad}$ $4 + 6 = \underline{\quad}$

$7 + 7 = \underline{\quad}$ $2 + 8 = \underline{\quad}$ $3 + 7 = \underline{\quad}$

Match the clock to the time:

Fill in the correct symbol $>$, $<$, or $=$:

	9:15
	10:30
	12:00
	9:45
	8:30

50	<input type="text"/>	30
23	<input type="text"/>	67
40	<input type="text"/>	50
9	<input type="text"/>	9
91	<input type="text"/>	90
15	<input type="text"/>	20

Fill in the correct symbol $>$, $<$, or $=$: Match the clock to the time:

$$86 \quad \square \quad 34$$

$$50 \quad \square \quad 20$$

$$15 \quad \square \quad 15$$

$$15 \quad \square \quad 25$$

$$30 \quad \square \quad 60$$

$$20 \quad \square \quad 21$$



4:30



2:15



1:45



5:15



3:00

Complete the addition problems:

$$\begin{array}{r} 8 \\ + 9 \\ \hline \end{array}$$

$$\begin{array}{r} 0 \\ + 8 \\ \hline \end{array}$$

$$\begin{array}{r} 3 \\ + 6 \\ \hline \end{array}$$

$$\begin{array}{r} 7 \\ + 5 \\ \hline \end{array}$$

$$\begin{array}{r} 6 \\ + 4 \\ \hline \end{array}$$






$$\begin{array}{r} 7 \\ + 3 \\ \hline \end{array}$$

$$\begin{array}{r} 9 \\ + 4 \\ \hline \end{array}$$

$$\begin{array}{r} 6 \\ + 3 \\ \hline \end{array}$$

Match the clock to the time:

Fill in the correct symbol $>$, $<$, or $=$:

	4:15
	2:00
	5:15
	1:15
	2:30

40	<input type="text"/>	40
52	<input type="text"/>	51
23	<input type="text"/>	45
22	<input type="text"/>	21
56	<input type="text"/>	76
12	<input type="text"/>	6

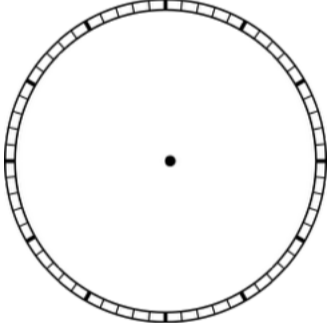
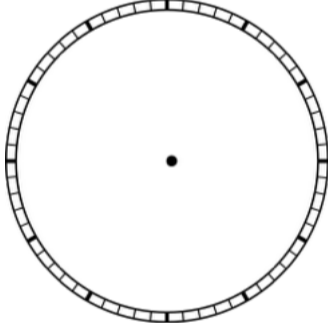
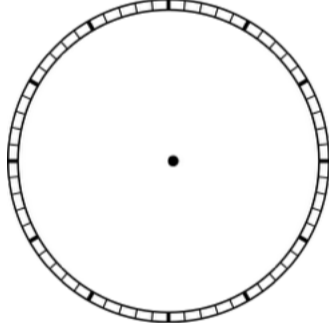
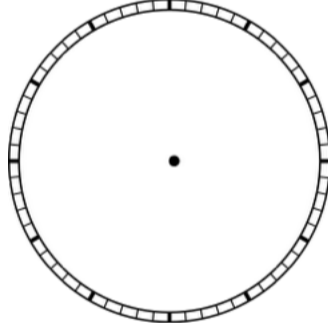
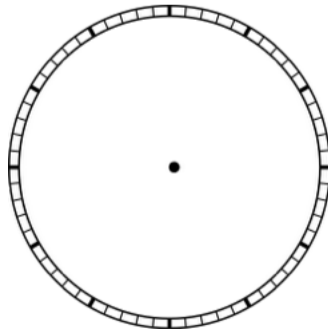
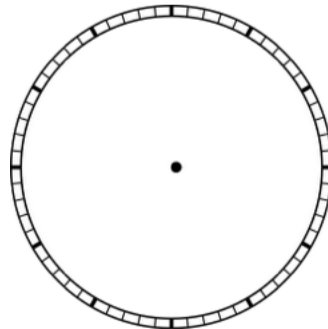
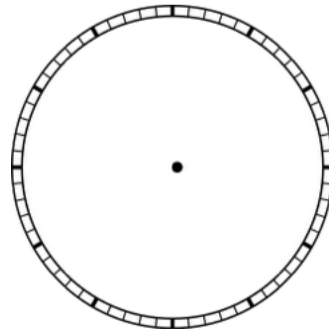
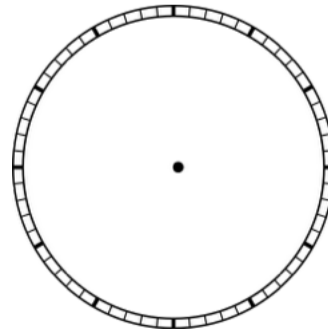
Complete the addition problems:

$8 + 1 = \underline{\quad}$	$2 + 5 = \underline{\quad}$	$6 + 7 = \underline{\quad}$
$6 + 3 = \underline{\quad}$	$5 + 8 = \underline{\quad}$	$2 + 9 = \underline{\quad}$
$3 + 5 = \underline{\quad}$	$8 + 7 = \underline{\quad}$	$9 + 3 = \underline{\quad}$



Complete the addition problems:

$\begin{array}{r} 7 \\ + 5 \\ \hline \end{array}$	$\begin{array}{r} 0 \\ + 0 \\ \hline \end{array}$	$\begin{array}{r} 6 \\ + 3 \\ \hline \end{array}$	$\begin{array}{r} 8 \\ + 5 \\ \hline \end{array}$
$\begin{array}{r} 9 \\ + 3 \\ \hline \end{array}$	$\begin{array}{r} 7 \\ + 5 \\ \hline \end{array}$	$\begin{array}{r} 5 \\ + 0 \\ \hline \end{array}$	$\begin{array}{r} 2 \\ + 5 \\ \hline \end{array}$

Draw the hands on the clock to make the time:

 7:45	 8:15	 11:30	 1:45
 11:15	 9:30	 12:45	 9:00

Write the time each clock says:

 _____	 _____
--	--

Fill in numbers for the more than, less than, and equal to symbols:

_____	>	_____	<	_____
_____	<	_____	<	_____
_____	>	_____	=	_____





Complete the addition problems:

$6 + 7 =$ _____	$3 + 6 =$ _____	$1 + 5 =$ _____
$9 + 3 =$ _____	$5 + 7 =$ _____	$2 + 6 =$ _____
$7 + 5 =$ _____	$6 + 3 =$ _____	$2 + 8 =$ _____

Complete the addition problems:

$\begin{array}{r} 6 \\ + 8 \\ \hline \end{array}$	$\begin{array}{r} 2 \\ + 1 \\ \hline \end{array}$	$\begin{array}{r} 6 \\ + 5 \\ \hline \end{array}$	$\begin{array}{r} 0 \\ + 8 \\ \hline \end{array}$
$\begin{array}{r} 3 \\ + 6 \\ \hline \end{array}$	$\begin{array}{r} 5 \\ + 2 \\ \hline \end{array}$	$\begin{array}{r} 6 \\ + 7 \\ \hline \end{array}$	$\begin{array}{r} 3 \\ + 8 \\ \hline \end{array}$
$\begin{array}{r} 9 \\ + 0 \\ \hline \end{array}$	$\begin{array}{r} 3 \\ + 9 \\ \hline \end{array}$	$\begin{array}{r} 6 \\ + 6 \\ \hline \end{array}$	$\begin{array}{r} 2 \\ + 7 \\ \hline \end{array}$

Write the time each clock says:

 _____	 _____
 _____	 _____

Complete the addition problems:

$6 + 4 = \underline{\quad}$ $5 + 7 = \underline{\quad}$ $2 + 5 = \underline{\quad}$

$6 + 8 = \underline{\quad}$ $3 + 2 = \underline{\quad}$ $5 + 0 = \underline{\quad}$

$5 + 3 = \underline{\quad}$ $2 + 7 = \underline{\quad}$ $5 + 4 = \underline{\quad}$

Match the clock to the time:

Fill in the correct symbol $>$, $<$, or $=$:



3:45



5:00



3:15



7:45



7:15

$23 \square 21$

$5 \square 5$

$50 \square 40$

$17 \square 18$

$75 \square 80$

$32 \square 33$

Complete the subtraction problems:

$4 - 2 =$ _____	$7 - 4 =$ _____	$6 - 0 =$ _____
$7 - 0 =$ _____	$6 - 3 =$ _____	$4 - 3 =$ _____
$5 - 2 =$ _____	$7 - 2 =$ _____	$5 - 0 =$ _____

Add each group of coins and write the total:



Write out each number:

678: _____	312: _____
-------------------	-------------------

Complete the subtraction problems:

$\begin{array}{r} 7 \\ - 3 \\ \hline \end{array}$	$\begin{array}{r} 5 \\ - 4 \\ \hline \end{array}$	$\begin{array}{r} 6 \\ - 1 \\ \hline \end{array}$	$\begin{array}{r} 7 \\ - 0 \\ \hline \end{array}$
$\begin{array}{r} 5 \\ - 4 \\ \hline \end{array}$	$\begin{array}{r} 5 \\ - 1 \\ \hline \end{array}$	$\begin{array}{r} 7 \\ - 3 \\ \hline \end{array}$	$\begin{array}{r} 4 \\ - 4 \\ \hline \end{array}$
$\begin{array}{r} 4 \\ - 0 \\ \hline \end{array}$	$\begin{array}{r} 5 \\ - 0 \\ \hline \end{array}$	$\begin{array}{r} 5 \\ - 3 \\ \hline \end{array}$	$\begin{array}{r} 6 \\ - 4 \\ \hline \end{array}$

Add each group of coins and write the total:



Complete the subtraction problems:

$6 - 3 = \underline{\quad}$ $5 - 3 = \underline{\quad}$ $4 - 2 = \underline{\quad}$
 $7 - 3 = \underline{\quad}$ $2 - 1 = \underline{\quad}$ $4 - 0 = \underline{\quad}$
 $5 - 1 = \underline{\quad}$ $6 - 4 = \underline{\quad}$ $6 - 6 = \underline{\quad}$

Write the number in words:

321	
676	
929	
343	
212	
120	
543	
456	

Circle the coins that make: **50¢**







Circle the coins that make: **35¢**



Complete the subtraction problems:

$\begin{array}{r} 5 \\ - 1 \\ \hline \end{array}$	$\begin{array}{r} 7 \\ - 0 \\ \hline \end{array}$	$\begin{array}{r} 5 \\ - 3 \\ \hline \end{array}$	$\begin{array}{r} 5 \\ - 4 \\ \hline \end{array}$
$\begin{array}{r} 7 \\ - 3 \\ \hline \end{array}$	$\begin{array}{r} 6 \\ - 2 \\ \hline \end{array}$	$\begin{array}{r} 6 \\ - 4 \\ \hline \end{array}$	$\begin{array}{r} 2 \\ - 1 \\ \hline \end{array}$
$\begin{array}{r} 4 \\ - 0 \\ \hline \end{array}$	$\begin{array}{r} 5 \\ - 2 \\ \hline \end{array}$	$\begin{array}{r} 5 \\ - 0 \\ \hline \end{array}$	$\begin{array}{r} 6 \\ - 3 \\ \hline \end{array}$

Write the time each clock says:

 _____	 _____
 _____	 _____

Match the number to the written number:

413

one hundred forty-seven

546

four hundred thirteen

506

five hundred six

711

seven hundred eleven

823

eight hundred twenty-three

147

five hundred forty-six

Circle the coins that make: **40¢**





Complete the subtraction problems:

$4 - 0 = \underline{\hspace{2cm}}$ $5 - 2 = \underline{\hspace{2cm}}$ $4 - 1 = \underline{\hspace{2cm}}$

$6 - 5 = \underline{\hspace{2cm}}$ $2 - 0 = \underline{\hspace{2cm}}$ $4 - 3 = \underline{\hspace{2cm}}$

$5 - 3 = \underline{\hspace{2cm}}$ $6 - 0 = \underline{\hspace{2cm}}$ $5 - 2 = \underline{\hspace{2cm}}$

Write the total of each group of coins:



Complete the subtraction problems:

$$\begin{array}{r} 6 \\ - 2 \\ \hline \end{array}$$

$$\begin{array}{r} 9 \\ - 2 \\ \hline \end{array}$$

$$\begin{array}{r} 4 \\ - 3 \\ \hline \end{array}$$

$$\begin{array}{r} 5 \\ - 0 \\ \hline \end{array}$$

$$\begin{array}{r} 7 \\ - 4 \\ \hline \end{array}$$

$$\begin{array}{r} 8 \\ - 6 \\ \hline \end{array}$$

$$\begin{array}{r} 7 \\ - 1 \\ \hline \end{array}$$

$$\begin{array}{r} 9 \\ - 5 \\ \hline \end{array}$$

$$\begin{array}{r} 7 \\ - 6 \\ \hline \end{array}$$

$$\begin{array}{r} 4 \\ - 1 \\ \hline \end{array}$$

$$\begin{array}{r} 3 \\ - 2 \\ \hline \end{array}$$

$$\begin{array}{r} 9 \\ - 0 \\ \hline \end{array}$$

Complete the subtraction problems:

$7 - 0 = \underline{\quad}$ $5 - 5 = \underline{\quad}$ $1 - 0 = \underline{\quad}$

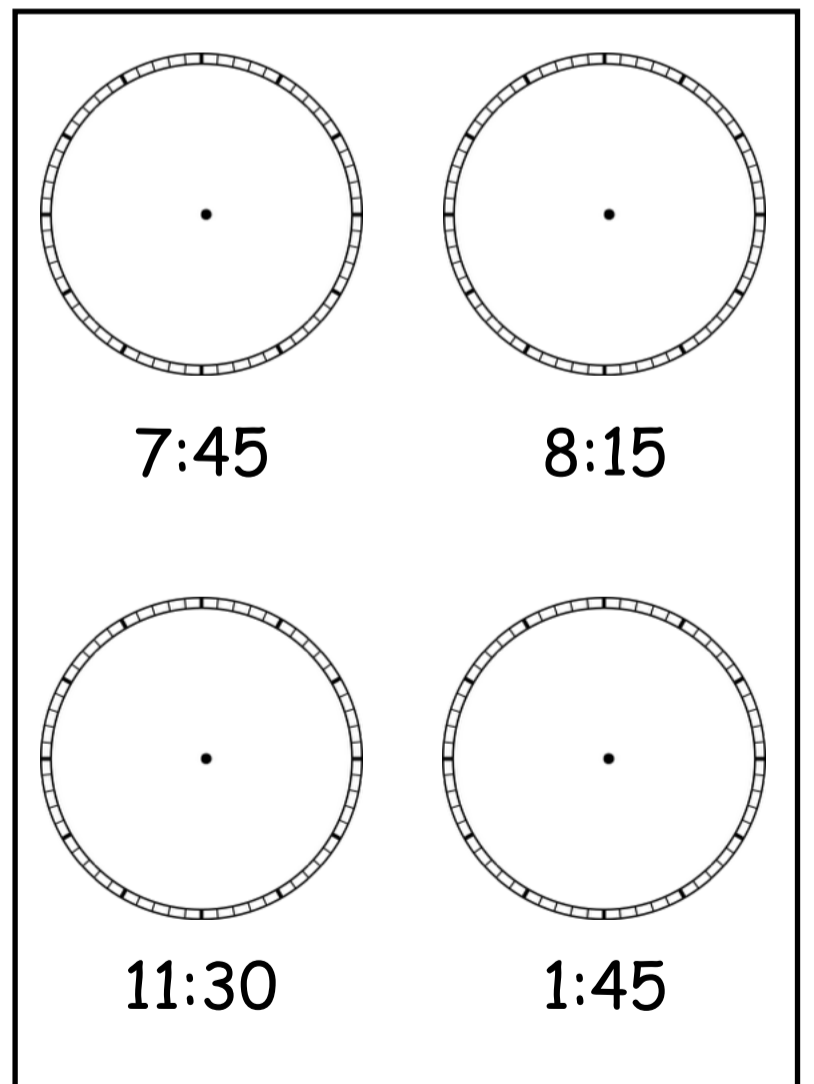
$0 - 0 = \underline{\quad}$ $4 - 2 = \underline{\quad}$ $5 - 4 = \underline{\quad}$

$6 - 5 = \underline{\quad}$ $6 - 2 = \underline{\quad}$ $7 - 3 = \underline{\quad}$


Write the number in words:

345	
765	
125	
123	
744	
889	
670	
234	

Draw the hands on the clock to make the time:



Write the total of each group of coins:



Complete the subtraction problems:

$$\begin{array}{r} 8 \\ - 8 \\ \hline \end{array}$$

$$\begin{array}{r} 7 \\ - 3 \\ \hline \end{array}$$

$$\begin{array}{r} 5 \\ - 0 \\ \hline \end{array}$$

$$\begin{array}{r} 7 \\ - 2 \\ \hline \end{array}$$

$$\begin{array}{r} 9 \\ - 3 \\ \hline \end{array}$$

$$\begin{array}{r} 4 \\ - 1 \\ \hline \end{array}$$

$$\begin{array}{r} 4 \\ - 2 \\ \hline \end{array}$$

$$\begin{array}{r} 7 \\ - 6 \\ \hline \end{array}$$

$$\begin{array}{r} 9 \\ - 8 \\ \hline \end{array}$$

$$\begin{array}{r} 8 \\ - 0 \\ \hline \end{array}$$

$$\begin{array}{r} 6 \\ - 3 \\ \hline \end{array}$$

$$\begin{array}{r} 7 \\ - 5 \\ \hline \end{array}$$

Match the number to the written number:

109

seven hundred sixteen

716

four hundred fifty-nine

459

six hundred thirteen

235

two hundred thirty-five

865

eight hundred sixty-five

613

one hundred nine

Circle the coins that make: **32¢**



Complete the subtraction problems:

$5 - 5 = \underline{\quad}$ $5 - 0 = \underline{\quad}$ $6 - 3 = \underline{\quad}$

$4 - 4 = \underline{\quad}$ $4 - 3 = \underline{\quad}$ $4 - 1 = \underline{\quad}$

$5 - 1 = \underline{\quad}$ $6 - 2 = \underline{\quad}$ $5 - 4 = \underline{\quad}$

Complete the subtraction problems:

$\begin{array}{r} 8 \\ - 6 \\ \hline \end{array}$	$\begin{array}{r} 2 \\ - 1 \\ \hline \end{array}$	$\begin{array}{r} 6 \\ - 5 \\ \hline \end{array}$	$\begin{array}{r} 8 \\ - 0 \\ \hline \end{array}$
$\begin{array}{r} 6 \\ - 3 \\ \hline \end{array}$	$\begin{array}{r} 5 \\ - 2 \\ \hline \end{array}$	$\begin{array}{r} 7 \\ - 6 \\ \hline \end{array}$	$\begin{array}{r} 8 \\ - 3 \\ \hline \end{array}$
$\begin{array}{r} 9 \\ - 0 \\ \hline \end{array}$	$\begin{array}{r} 9 \\ - 3 \\ \hline \end{array}$	$\begin{array}{r} 6 \\ - 6 \\ \hline \end{array}$	$\begin{array}{r} 7 \\ - 2 \\ \hline \end{array}$

Circle the coins that make: **54¢**

Circle the coins that make: **65¢**



Complete the subtraction problems:

$3 - 1 = \underline{\quad}$	$7 - 5 = \underline{\quad}$	$5 - 2 = \underline{\quad}$
$6 - 2 = \underline{\quad}$	$6 - 1 = \underline{\quad}$	$4 - 0 = \underline{\quad}$
$4 - 2 = \underline{\quad}$	$1 - 1 = \underline{\quad}$	$2 - 0 = \underline{\quad}$


Add each group of coins and write the total:




Write out each number:

$305: \underline{\hspace{2cm}}$	$671: \underline{\hspace{2cm}}$
---------------------------------	---------------------------------

Add each group of coins and write the total:







Complete the subtraction problems:

$$\begin{array}{r} 9 \\ - 4 \\ \hline \end{array}$$

$$\begin{array}{r} 7 \\ - 5 \\ \hline \end{array}$$

$$\begin{array}{r} 6 \\ - 3 \\ \hline \end{array}$$

$$\begin{array}{r} 7 \\ - 4 \\ \hline \end{array}$$

$$\begin{array}{r} 6 \\ - 3 \\ \hline \end{array}$$

$$\begin{array}{r} 5 \\ - 4 \\ \hline \end{array}$$

$$\begin{array}{r} 8 \\ - 2 \\ \hline \end{array}$$

$$\begin{array}{r} 9 \\ - 4 \\ \hline \end{array}$$

$$\begin{array}{r} 10 \\ - 7 \\ \hline \end{array}$$

$$\begin{array}{r} 2 \\ - 1 \\ \hline \end{array}$$

$$\begin{array}{r} 7 \\ - 2 \\ \hline \end{array}$$

$$\begin{array}{r} 6 \\ - 0 \\ \hline \end{array}$$

Write the number in words:

765	
123	
863	
247	
212	
129	
115	
140	

Fill in the correct symbol

>, <, or =:

40	<input type="text"/>	40
52	<input type="text"/>	51
23	<input type="text"/>	45
22	<input type="text"/>	21
56	<input type="text"/>	76
12	<input type="text"/>	6

Complete the subtraction problems:

$7 - 4 =$ _____	$5 - 4 =$ _____	$6 - 4 =$ _____
$6 - 5 =$ _____	$3 - 2 =$ _____	$7 - 6 =$ _____
$3 - 3 =$ _____	$4 - 2 =$ _____	$7 - 5 =$ _____

Write out each number:

209: _____

105: _____

180: _____

673: _____

123: _____

453: _____

Complete the subtraction problems:

$$\begin{array}{r} 6 \\ - 4 \\ \hline \end{array}$$

$$\begin{array}{r} 9 \\ - 0 \\ \hline \end{array}$$

$$\begin{array}{r} 9 \\ - 3 \\ \hline \end{array}$$

$$\begin{array}{r} 5 \\ - 2 \\ \hline \end{array}$$

$$\begin{array}{r} 6 \\ - 3 \\ \hline \end{array}$$

$$\begin{array}{r} 4 \\ - 3 \\ \hline \end{array}$$

$$\begin{array}{r} 9 \\ - 8 \\ \hline \end{array}$$

$$\begin{array}{r} 5 \\ - 4 \\ \hline \end{array}$$

$$\begin{array}{r} 8 \\ - 7 \\ \hline \end{array}$$

$$\begin{array}{r} 6 \\ - 2 \\ \hline \end{array}$$

$$\begin{array}{r} 5 \\ - 1 \\ \hline \end{array}$$

$$\begin{array}{r} 8 \\ - 6 \\ \hline \end{array}$$

Match the number to the written number:

459

three hundred twenty-eight

328

seven hundred nine

719

three hundred thirteen

709

four hundred fifty-nine

313

seven hundred nineteen

456

four hundred fifty-six

Circle the coins that make: **27¢**



Complete the subtraction problems:

$2 - 1 = \underline{\quad}$

$6 - 5 = \underline{\quad}$

$4 - 2 = \underline{\quad}$

$5 - 1 = \underline{\quad}$

$4 - 4 = \underline{\quad}$

$6 - 3 = \underline{\quad}$

$7 - 2 = \underline{\quad}$

$4 - 3 = \underline{\quad}$

$2 - 1 = \underline{\quad}$

Complete the subtraction problems:

$\begin{array}{r} 7 \\ - 2 \\ \hline \end{array}$	$\begin{array}{r} 9 \\ - 3 \\ \hline \end{array}$	$\begin{array}{r} 5 \\ - 5 \\ \hline \end{array}$	$\begin{array}{r} 7 \\ - 3 \\ \hline \end{array}$
$\begin{array}{r} 8 \\ - 0 \\ \hline \end{array}$	$\begin{array}{r} 7 \\ - 4 \\ \hline \end{array}$	$\begin{array}{r} 9 \\ - 4 \\ \hline \end{array}$	$\begin{array}{r} 6 \\ - 2 \\ \hline \end{array}$
$\begin{array}{r} 9 \\ - 4 \\ \hline \end{array}$	$\begin{array}{r} 6 \\ - 4 \\ \hline \end{array}$	$\begin{array}{r} 7 \\ - 3 \\ \hline \end{array}$	$\begin{array}{r} 9 \\ - 2 \\ \hline \end{array}$

Write the total of each group of coins:



Complete the subtraction problems:

$8 - 2 = \underline{\hspace{2cm}}$	$9 - 5 = \underline{\hspace{2cm}}$	$9 - 3 = \underline{\hspace{2cm}}$
$9 - 1 = \underline{\hspace{2cm}}$	$9 - 4 = \underline{\hspace{2cm}}$	$9 - 7 = \underline{\hspace{2cm}}$
$9 - 8 = \underline{\hspace{2cm}}$	$9 - 6 = \underline{\hspace{2cm}}$	$9 - 3 = \underline{\hspace{2cm}}$

Circle the coins that make: **45¢**



Circle the coins that make: **80¢**



Fill in numbers for the more than, less than, and equal to symbols:

_____	>	_____
_____	<	_____
_____	=	_____
_____	>	_____

Complete the subtraction problems:

$$\begin{array}{r} 8 \\ - 2 \\ \hline \end{array}$$

$$\begin{array}{r} 8 \\ - 3 \\ \hline \end{array}$$

$$\begin{array}{r} 8 \\ - 7 \\ \hline \end{array}$$

$$\begin{array}{r} 9 \\ - 0 \\ \hline \end{array}$$

$$\begin{array}{r} 9 \\ - 9 \\ \hline \end{array}$$

$$\begin{array}{r} 9 \\ - 1 \\ \hline \end{array}$$

$$\begin{array}{r} 8 \\ - 4 \\ \hline \end{array}$$

$$\begin{array}{r} 8 \\ - 0 \\ \hline \end{array}$$

$$\begin{array}{r} 9 \\ - 4 \\ \hline \end{array}$$

$$\begin{array}{r} 8 \\ - 5 \\ \hline \end{array}$$

$$\begin{array}{r} 9 \\ - 6 \\ \hline \end{array}$$

$$\begin{array}{r} 8 \\ - 4 \\ \hline \end{array}$$

Write out each number:

211: _____

876: _____

235: _____

567: _____

320: _____

560: _____

Complete the subtraction problems:

$9 - 0 =$ _____	$8 - 5 =$ _____	$9 - 9 =$ _____
$8 - 4 =$ _____	$8 - 3 =$ _____	$9 - 2 =$ _____
$8 - 8 =$ _____	$9 - 3 =$ _____	$8 - 1 =$ _____

Write the number in words:

140	
653	
650	
781	
342	
482	
982	
125	

Fill in numbers for the more than, less than, and equal to symbols:

_____	>	_____
_____	<	_____
_____	>	_____
_____	=	_____
_____	<	_____

Write the total of each group of coins:



Complete the subtraction problems:

$$\begin{array}{r} 9 \\ - 1 \\ \hline \end{array}$$

$$\begin{array}{r} 8 \\ - 3 \\ \hline \end{array}$$

$$\begin{array}{r} 8 \\ - 2 \\ \hline \end{array}$$

$$\begin{array}{r} 9 \\ - 3 \\ \hline \end{array}$$

$$\begin{array}{r} 8 \\ - 7 \\ \hline \end{array}$$

$$\begin{array}{r} 8 \\ - 4 \\ \hline \end{array}$$

$$\begin{array}{r} 8 \\ - 1 \\ \hline \end{array}$$

$$\begin{array}{r} 9 \\ - 0 \\ \hline \end{array}$$

$$\begin{array}{r} 8 \\ - 3 \\ \hline \end{array}$$

$$\begin{array}{r} 8 \\ - 5 \\ \hline \end{array}$$

$$\begin{array}{r} 9 \\ - 3 \\ \hline \end{array}$$

$$\begin{array}{r} 8 \\ - 3 \\ \hline \end{array}$$